

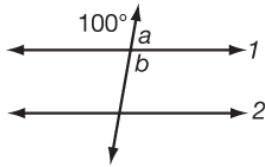
Power Up Facts O

ANSWER KEY

Facts

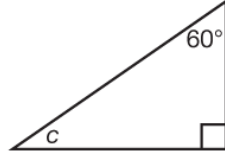
Find the measure of the angle indicated by the letters.

parallel lines 1 and 2

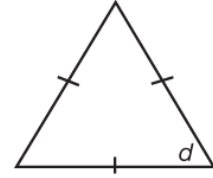


$$\underline{m\angle a = 80^\circ}$$

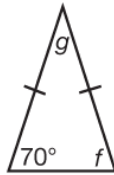
$$\underline{m\angle b = 100^\circ}$$



$$\underline{m\angle c = 30^\circ}$$



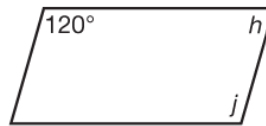
$$\underline{m\angle d = 60^\circ}$$



$$\underline{m\angle f = 70^\circ}$$

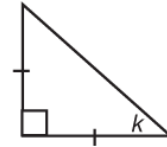
$$\underline{m\angle g = 40^\circ}$$

parallelogram



$$\underline{m\angle h = 60^\circ}$$

$$\underline{m\angle j = 120^\circ}$$



$$\underline{m\angle k = 45^\circ}$$